



Sri Guru Harkrishan Public School,

Dugri Road Ludhiana

HOLIDAYS HOMEWORK

Relax ♥

Explore ☀

Learn 📖

Have Fun 😊

“Holidays are the perfect time to relax, explore, and grow. ♥

Come back refreshed, recharged and ready to *shine!*”

Use this time to do what makes your *soul happy* and your future bright. ♥

KEEP LEARNING, KEEP GROWING, KEEP SMILING!



SRI GURU HARKRISHAN PUBLIC SCHOOL, LUDHIANA
SUMMER VACATION HOMEWORK 2026
CLASS III

EVS HOLIDAYS HOMEWORK

1. Indoor Games Activity :

Play indoor games like Ludo, Chess, Carrom etc. with your grandparents. Take a picture of you and your grandparents playing the game and paste it on an A4 size sheet.

2. Plants and Trees Survey :

Look around your home and surroundings. Count the number of different plants and trees. Fill the table given below and answer the questions on an A4 size sheet.

S.NO	PLANTS / TREES	NUMBER
1.	Potted Plants	
2.	Rose Plants	
3.	Small Plants	
4.	Big Trees	
5.	Palm Trees	
6.	Mango Trees	
7.	Tiny Trees	
8.	Guava Trees	

Questions / Answers

Q1. Which plant/tree is highest in number?

Ans: _____

Q2. Which plant/tree is lowest in number?

Ans: _____

Q3. What is the difference between the highest and lowest number of plants/trees?

Ans: _____

Food: The Staple Diet

Staple food is the main food eaten by people in a region. Rice, wheat, and maize are common staple foods. Different people eat different staple foods depending on the place where they live. Staple food gives us energy to work and grow.

Fill in the Blanks:

1. Staple food gives us _____.
2. Rice is a common _____ food.
3. Wheat and maize are kinds of _____ food.
4. Different places have different staple _____.
5. Food helps us to grow and stay _____.

MATHS HOLIDAYS HOME WORK



MATHS PRACTICE WORKSHEET

MIXED TABLES 1 TO 12



Solve the following. Write the correct answers.



1

- 1) $7 \times 3 =$ _____
- 2) $12 \times 1 =$ _____
- 3) $5 \times 6 =$ _____
- 4) $9 \times 2 =$ _____
- 5) $11 \times 1 =$ _____
- 6) $3 \times 8 =$ _____
- 7) $2 \times 4 =$ _____
- 8) $10 \times 5 =$ _____
- 9) $6 \times 7 =$ _____
- 10) $4 \times 9 =$ _____

2

- 1) $8 \times 2 =$ _____
- 2) $3 \times 6 =$ _____
- 3) $7 \times 4 =$ _____
- 4) $12 \times 2 =$ _____
- 5) $9 \times 5 =$ _____
- 6) $1 \times 11 =$ _____
- 7) $6 \times 3 =$ _____
- 8) $5 \times 8 =$ _____
- 9) $10 \times 2 =$ _____
- 10) $4 \times 7 =$ _____

3

- 1) $9 \times 3 =$ _____
- 2) $6 \times 6 =$ _____
- 3) $11 \times 3 =$ _____
- 4) $2 \times 9 =$ _____
- 5) $7 \times 7 =$ _____
- 6) $10 \times 3 =$ _____
- 7) $4 \times 5 =$ _____
- 8) $12 \times 3 =$ _____
- 9) $3 \times 2 =$ _____
- 10) $8 \times 1 =$ _____

4

- 1) $5 \times 4 =$ _____
- 2) $9 \times 1 =$ _____
- 3) $6 \times 8 =$ _____
- 4) $2 \times 12 =$ _____
- 5) $7 \times 2 =$ _____
- 6) $11 \times 4 =$ _____
- 7) $3 \times 9 =$ _____
- 8) $10 \times 6 =$ _____
- 9) $1 \times 8 =$ _____
- 10) $4 \times 3 =$ _____

5

- 1) $12 \times 5 =$ _____
- 2) $7 \times 8 =$ _____
- 3) $3 \times 5 =$ _____
- 4) $9 \times 6 =$ _____
- 5) $2 \times 7 =$ _____
- 6) $10 \times 9 =$ _____
- 7) $6 \times 1 =$ _____
- 8) $11 \times 5 =$ _____
- 9) $4 \times 8 =$ _____
- 10) $5 \times 2 =$ _____

6

- 1) $8 \times 6 =$ _____
- 2) $3 \times 7 =$ _____
- 3) $12 \times 6 =$ _____
- 4) $5 \times 9 =$ _____
- 5) $2 \times 1 =$ _____
- 6) $7 \times 10 =$ _____
- 7) $11 \times 6 =$ _____
- 8) $4 \times 6 =$ _____
- 9) $6 \times 2 =$ _____
- 10) $9 \times 4 =$ _____

7

- 1) $4 \times 7 =$ _____
- 2) $9 \times 9 =$ _____
- 3) $6 \times 4 =$ _____
- 4) $1 \times 12 =$ _____
- 5) $3 \times 10 =$ _____
- 6) $8 \times 3 =$ _____
- 7) $11 \times 2 =$ _____
- 8) $7 \times 5 =$ _____
- 9) $2 \times 6 =$ _____
- 10) $5 \times 5 =$ _____

8

- 1) $10 \times 8 =$ _____
- 2) $3 \times 3 =$ _____
- 3) $12 \times 4 =$ _____
- 4) $6 \times 5 =$ _____
- 5) $7 \times 1 =$ _____
- 6) $9 \times 7 =$ _____
- 7) $2 \times 8 =$ _____
- 8) $4 \times 10 =$ _____
- 9) $11 \times 3 =$ _____
- 10) $5 \times 7 =$ _____

9

- 1) $5 \times 3 =$ _____
- 2) $8 \times 8 =$ _____
- 3) $7 \times 6 =$ _____
- 4) $2 \times 2 =$ _____
- 5) $12 \times 7 =$ _____
- 6) $9 \times 10 =$ _____
- 7) $3 \times 1 =$ _____
- 8) $6 \times 9 =$ _____
- 9) $4 \times 4 =$ _____
- 10) $11 \times 7 =$ _____

10

- 1) $6 \times 10 =$ _____
- 2) $7 \times 9 =$ _____
- 3) $12 \times 8 =$ _____
- 4) $5 \times 1 =$ _____
- 5) $3 \times 11 =$ _____
- 6) $8 \times 7 =$ _____
- 7) $2 \times 5 =$ _____
- 8) $10 \times 1 =$ _____
- 9) $9 \times 12 =$ _____
- 10) $4 \times 11 =$ _____



Practice More, Learn More,
Score More!



MATHS PRACTICE WORKSHEET

1) Add

- (a) $2,345 + 1,234$
 (b) $6,789 + 2,456$



2) Subtract

- (a) $8,763 - 3,251$
 (b) $9,250 - 4,138$



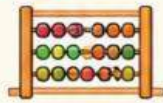
3) Arrange the given numbers in ascending order

- (a) 41, 305, 12, 89, 200
 (b) 500, 67, 999, 123, 450



4) Write the Successor and Predecessor of the following numbers

- (a) 4,569
 (b) 2,999



5) Write the place value and face value of the underlined digits

- (a) 3,847
 (b) 6,072



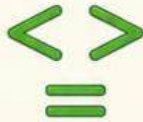
6) Write expanded form of

- (a) 3756
 (b) 6082

1 2 3

7) Compare the numbers and put $<$, $>$ or $=$

- (a) 4521 () 4527
 (b) 6789 () 6789
 (c) 2999 () 3000
 (d) 7812 () 7182



8) Use all the digits 3, 6, 1 and 8 and form

- (a) Greatest 4-digit number
 (b) Smallest 4-digit number

3 6
1 8

9) Write the numbers between

- (a) 2341 to 2347
 (b) 5200 to 5210



10) Add

- (a) $4,567 + 2,345$
 (b) $7,654 + 1,298$



11) Subtract

- (a) $7,500 - 2,376$
 (b) $6,843 - 4,129$



12) Fill in the blanks

- (a) $3,248 =$ _____ thousands + _____ hundreds
 + _____ tens + _____ ones
 (b) $6,703 =$ _____ thousands + _____ hundreds
 + _____ tens + _____ ones

13) Round off the numbers to the nearest 10

- (a) 237 (b) 1,864



14) Multiply

- (a) 23×4 (b) 15×6



15) Divide

- (a) $84 \div 4$ (b) $96 \div 6$



16) Problem Sums (Solve the following)

- A shopkeeper had 3,245 notebooks. He sold 1,876 notebooks. How many notebooks are left with him? _____
- Rani has 2,350 stickers. She gives 975 stickers to her friend. How many stickers are left with Rani? _____
- In a library, there are 4,678 story books and 2,543 science books. How many books are there in all? _____
- A school has 1,256 boys and 1,134 girls. How many students are there in the school? _____
- A farmer has 3,650 apples. He packed them equally in 5 baskets. How many apples are there in each basket? _____





MATHS PRACTICE WORKSHEET



3 Add

- (a) $5,623 + 3,942$
- (b) $77,634 + 31,624$



4 Subtract

- (a) 34,700 from 92,006
- (b) 1,304 from 6,212



5 Arrange the given numbers in ascending order

- a) 35, 457, 25, 208
- b) 66, 77, 88, 44, 300



6 Write the Successor and Predecessor of the following numbers

- (a) 6,798
- (b) 3,7812



7 Write the place value and face value of the underlined digits

- (a) 7,382
- (b) 1,956



8 Write expanded form of

- a) 4621
- b) 9547



9 Compare the numbers and put $<$, $>$ or $=$

- a) 5315 () 3465
- b) 9856 () 9856
- c) 1026 () 1025
- d) 6423 () 6432



10 Use all the digits 7, 9, 5, 0 and form

- (a) Greatest 4-digit number
- (b) Smallest 4-digit number



11 Write the numbers between

- a) 1457 to 1463
- b) 4733 to 4740



12 Subtract

- a) 3325 from 8765
- b) 9316 from 9999



13 Problem Sums

- a) Ramu sells Vada in the school canteen. He sold 39 vadas on first day, 12 more on next day. How many vadas did he sell in these two days?



- b) Population of two places are 3,664 and 7,314. Find the total population of these places.

14 14)

- (a) $3417 + 0 = \underline{\hspace{2cm}}$
- (b) $34621 - 34621 = \underline{\hspace{2cm}}$
- (c) $9000 - 0 = \underline{\hspace{2cm}}$



PUNJABI



✨ 3ਵੀਂ ਜਮਾਤ ਦਾ ਛੁੱਟੀਆਂ ਦਾ ਕੰਮ

📖 ਮਹੀਨਿਆਂ ਦੇ ਨਾਮ A4 ਸ਼ੀਟ ਉੱਤੇ ਲਿਖੋ।



ਕਿਸੇ ਬਾਗ ਦੀ ਸੈਰ ਤੇ 10 ਲਾਈਨਾਂ ਲਿਖੋ।

ਗਿਣਤੀ 11 ਤੋਂ 20 ਤੱਕ ਰੰਗਾਂ ਨਾਲ A4 ਸ਼ੀਟ ਉੱਤੇ ਲਿਖੋ।

ਸਵੱਛ ਭਾਰਤ ਅਭਿਆਨ ਤੇ ਆਧਾਰਿਤ ਤੁਸੀਂ ਆਪਣੇ ਆਲੇ ਦੁਆਲੇ ਨੂੰ ਕਿਵੇਂ ਸਾਫ਼ ਰੱਖਦੇ ਹੋਏ ਕੋਈ 10 ਲਾਈਨਾਂ ਲਿਖੋ।

🎨 ਰਚਨਾਤਮਕ ਗਤੀਵਿਧੀ

ਕਾਗਜ਼ ਦੀ ਮਾਸਕ ਬਣਾਓ।

ਇੱਕ ਸੋਹਣਾ ਬੁੱਕਮਾਰਕ ਤਿਆਰ ਕਰੋ।




ग्रीष्मकालीन अवकाश गृह कार्य



1. उपरोक्त चित्र को देखते हुए गर्मी के मौसम का वर्णन कीजिए। गर्मी के मौसम में आपका पसंदीदा फल और पर पदार्थ कौन सा है और क्यों?



2. 15 अगस्त के बारे में जानकारी प्राप्त करते हुए राष्ट्रीय ध्वज का चित्र बनाकर उस पर पाँच पंक्तियाँ लिखिए।



3.उपरोक्त चित्र को देखते हुए शरीर के अंगों के नाम लिखो।

4.पाठ 3 व 4 का मौखिक अभ्यास करते हुए कठिन शब्द लिखकर उनका वाक्य में प्रयोग करें।

English

Read the passage and answer the questions:

A Trip to the Zoo

On Sunday, Meena went to the zoo with her father. She saw many animals there. First, she saw a big elephant. It had a long trunk. Then she saw a tall giraffe eating leaves. Meena liked the monkeys best. They were jumping from tree to tree. Her father bought her an ice cream. Meena was very happy. She came home and told her mother all about the zoo.

A. Answer the following questions:

1. Where did Meena go on Sunday?

2. Who went with Meena to the zoo?

B. True or False:

1. Meena saw a lion first. ()
2. Meena liked the monkeys best. ()
3. Meena went to the zoo on Monday. ()

C. Fill in the blanks:

1. The elephant had a long
2. The monkeys were jumping from to

She threw the ball up once more. It fell in the grass, rolled towards the well and fell into the deep dark waters. The princess peered into the water. 'Where has my pretty golden ball gone?' she said. It was not a rubber ball that would float in the water. It was a heavy gold ball. 'I can't see it,' cried the princess. 'Where oh where has my pretty ball gone?'

Questions and Answers

Where did the princess's ball fall?

Why couldn't the princess see her ball in the water?

Fill in the Blanks

1. The princessinto the water to look for her ball.
2. The ball was a heavyball.
3. It was not a ball that would float in the water.

True or False

1. The princess's ball floated in the water. ___
2. The ball fell into the well after rolling through the grass. ___

King Krishnadevaraya was a great king. In his court, he had many courtiers. His favourite courtier was Tenali Raman. The king gave him some very expensive gifts. Many thieves wanted to steal these gifts from Tenali's house.

Questions and Answers

1. Who was King Krishnadevaraya's favourite courtier?

2. Why did thieves want to go to Tenali's house?

Fill in the Blank

1. King Krishnadevaraya was a great
2. The king gave Tenali Raman some verygifts.
3.wanted to steal the gifts from Tenali's house.

True or False

2. Tenali Raman was the king in the court.
3. The king gave Tenali Raman cheap gifts.

'Look! Look!' she said. 'Look in the grass. There are so many grains of rice that we can eat our fill and will need no more food today.' 'Oh yes,' said their leader. 'There are plenty of grains of rice but who has thrown them here,'

Questions and Answers

1. Where were the grains of rice found?

2. What did their leader say about the grains of rice?

Fill in the Blanks

1. There are so many grains of that we can eat our fill.
2. 'Oh yes,' said their
3. The grains of rice were found in the

True or False

1. The birds said they will need more food today.
2. The leader asked who had thrown the grains of rice there

Then how the little kite thrilled with pride,
As he sailed with the big kite side by side!
While far below he could see the ground,
And the boys like small spots moving round.

Multiple Choice Questions

1. How did the little kite feel?

- a) Scared
- b) Thrilled with pride
- c) Angry
- d) Sleepy

2. What did the little kite see far below?

- a) The clouds
- b) The ground and boys like small spots
- c) A big kite
- d) The sea

3. Who did the little kite sail with?

- a) The clouds
- b) The big kite
- c) The boys
- d) The birds



VOCABULARY ★ WORKSHEET ★



Choose the correct word from the box to complete each sentence.

mountain train bus bicycle ship subway
bridge lighthouse museum hotel farm market



1. We can go hiking on the _____.



2. We travel long distances by _____.



3. We take the _____ to school.



4. I ride my _____ in the park.



5. We go on a vacation by _____.



6. The _____ goes underground.



7. We cross the river using a _____.



8. The _____ helps ships at night.



9. We see old and interesting things at the _____.



10. We stay at a _____ when we travel.





REVISION WORKSHEET

NOUNS, CAPITALIZATION, SENTENCES & PLURAL



A. Common Noun or Proper Noun (Write C or / N)

- | | |
|-------------------------------------------------------------|--------------------------------------------------------|
| 1. Delhi is the capital of India. <input type="checkbox"/> | 6. The dog is barking loudly. <input type="checkbox"/> |
| 2. The boy is playing in the park. <input type="checkbox"/> | 7. Sunday is my favorite day. <input type="checkbox"/> |
| 3. Riya has a red bag. <input type="checkbox"/> | 8. I saw a bird on the tree. <input type="checkbox"/> |
| 4. My teacher is very kind. <input type="checkbox"/> | 9. Rahul is my best friend. <input type="checkbox"/> |
| 5. We visited the Taj Mahal. <input type="checkbox"/> | 10. The river is very long. <input type="checkbox"/> |



B. Capitalization (Rewrite correctly)


- | | |
|------------------------------------------------|-------------------------------------------------------|
| 1. i live in mumbai.
_____ | 6. my sister studies in delhi public school.
_____ |
| 2. we met mr sharma yesterday.
_____ | 7. we went to chennai last summer.
_____ |
| 3. my birthday is in july.
_____ | 8. ram and sita are friends.
_____ |
| 4. she is reading harry potter.
_____ | 9. the sun rises in the east.
_____ |
| 5. monday is the first day of school.
_____ | 10. i have a pet cat named whiskers.
_____ |



Remember!
Always capitalize the first letter of names, places, days, months, festivals, etc., and the word I.


C. Jumbled Sentences (Arrange correctly)

- | | |
|---------------------------------------------------------|---------------------------------------------------------|
| 1. playing / park / the / in / children / are.
_____ | 6. friends / we / good / are.
_____ |
| 2. mango / is / my / fruit / favorite.
_____ | 7. the / shining / sun / is.
_____ |
| 3. goes / school / she / to / daily.
_____ | 8. football / playing / they / are.
_____ |
| 4. a / dog / barking / is / loudly.
_____ | 9. mother / cooking / is / kitchen / in / the.
_____ |
| 5. reading / book / he / is / a.
_____ | 10. happy / children / are / the.
_____ |



D. Singular to Plural

- | |
|-----------------|
| 1. cat → _____ |
| 2. boy → _____ |
| 3. bus → _____ |
| 4. box → _____ |
| 5. baby → _____ |



- | |
|-------------------|
| 6. leaf → _____ |
| 7. mango → _____ |
| 8. child → _____ |
| 9. foot → _____ |
| 10. tooth → _____ |




Write 3 sentences using: a book my school a good friend

- _____
- _____
- _____



FILL IN THE BLANKS STORY



WORD BOX

picnic • laughed • grass • kite
basket • played • tasty • beautiful



It was a _____ day.



We went to the park for a _____.



Mom packed a big _____.



We sat on the green _____.



I flew my _____ high in the sky.



We _____ games and had so much fun.



We _____ and enjoyed together.



The food was _____.



It was a _____ day we will always remember!